



SUMMATIVE ASSIGNMENT -1 2025-26


Grade – JR.KG

Subject - Math

Syllabus – From Textbook




Q-1. Write numbers (1-30):




Q-2. Write the Missing numbers (1-30):






1		3		5		7		9
		12			15			18
		19					23	
					28			30

Q-3. Count the shape and circle the correct number.

		
9 2 6	8 7 1	3 5 10

		
1 9 5	10 2 6	7 3 4

		
6 8 1	5 3 9	2 4 1

Q-4 Write after numbers:

2 _____	6 _____	9 _____
12 _____	19 _____	23 _____
14 _____	11 _____	7 _____
20 _____	5 _____	27 _____
22 _____	29 _____	0 _____

Q-5 Write between numbers:

1 _____ 3	9 _____ 11
4 _____ 6	8 _____ 10
12 _____ 14	5 _____ 7
16 _____ 18	18 _____ 20
7 _____ 9	14 _____ 16
11 _____ 13	17 _____ 19

Q-6 Match numbers with their number names:

5	One
6	Two
9	Four
1	Ten
7	Five
2	Seven
4	Six
10	Nine
8	Three
3	Eight

Commented [G1]:


Q 7 Write Before and after Numbers

	2	
	4	
	8	
	10	
	12	
	15	
	17	
	19	
	7	
	16	

Q 8 Write the Number Names

1	One		
2	Two		
3	Three		
4	Four		
5	Five		
6	Six		
7	Seven		
8	Eight		
9	Nine		
10	Ten		

Q 9 Circle the big object



Q 10 Write the Number

eight

two

five

ten

three

seven




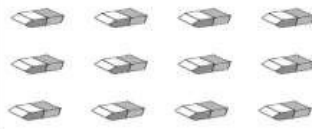


one

four

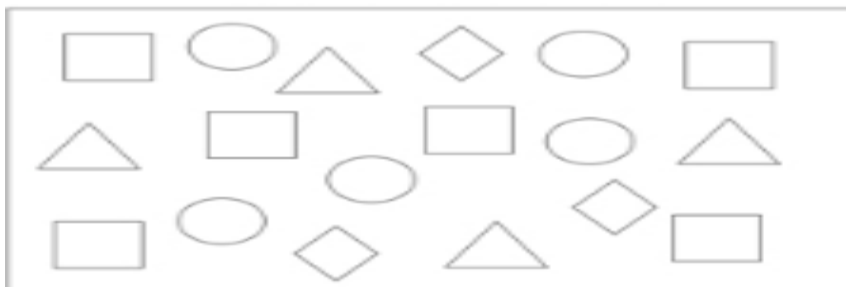
six

nine

Q-11 Circle the objects as per the given number

circle 5 calculators	circle 9 sharpeners
	
circle 8 pencils	circle 7 erasers
	
circle 6 rulers	circle 10 books
	

Q 12 Count the number of shapes and write the numbers in box:



 = _____  = _____

 = _____  = _____

Q 13 Circle the things that are full



Q 14 Join the dots and colour the Picture.

